




Olympiad G.K. Sample Paper Class – 2


General Awareness

1. Read the given statement carefully and identify the insect.

I make a web to live on it.



2. Seeds of which flower are eaten?



3. The edible part in the given picture is _____.



4. Pheran is worn in which state/union territory?



5. In which state is Pongal celebrated?



6. Where is the Gateway of India situated?



7. Which tool is used by a tailor?



8. Which is the national flag of USA?

- (a)  (b)  (c)  (d) 

9. Which is an Indian musical instrument?

- (a) Shehnai (b) Flute (c) Guitar (d) Both (a) and (b)

10. Who is the first man to set food on the moon?

- (a) Neil Armstrong (b) Rakesh Sharma
(c) Kalpana Chawla (d) None of these

11. Which is a land animal?

- (a) Deer (b) Jellyfish (c) Lobster (d) Seagull

12. Which part of our body helps us to see a colourful rainbow?

- (a) Eyes (b) Ears (c) Nose (d) Skin

13. Which is the brightest planet of the solar system?

- (a) Venus (b) Mercury (c) Mars (d) Jupiter

14. Which movie is about penguins?

- (a) Dumbo (b) Jungle Book (c) Madagascar (d) Happy feet

15. Which term is related to the board game shown in the picture?

- (a) Catch (b) Checkmate (c) Club (d) Die



16. Which computer part helps us to get a hard copy of what we see on a monitor?

- (a) Printer (b) Scanner (c) UPS (d) Mouse

17. Which country is called 'Land of Spices'?

- (a) China (b) USA (c) India (d) Sri Lanka

18. What does the given sign mean?

- (a) No horn (b) No entry
(c) No parking (d) No bicycle



19. Which fairy tale character is shown in the picture?

(a) Ali Baba

(b) Aladdin

(c) Jack

(d) Sindbad



20. Which planet is known as the 'Red Planet'?

(a) Venus

(b) Earth

(c) Mars

(d) Saturn

Mind Power

21. Rearrange the jumbled letters to find the name of a transport that hovers in the sky.

(a) HOETLPIRCE

(b) CICYEBL

(c) SIABATLO

(d) SBUMRANIE

22. Which action is NOT environment friendly?

(a) Wasting paper

(b) Closing tap after use

(c) Switching off lights when not in use

(d) Storing rain water

23. What comes next?

①

②

③

⑤

⑦

⑨

(a) 9

(b) 11

(c) 13

(d) 16

24. Which is the fifth month of a year?

(a) March

(b) May

(c) June

(d) November

25. Which symbol will make the given number sentence true?

$$44 + 2 \quad \square \quad 2 + 44$$

(a) >

(b) <

(c) =

(d) cannot say

Current Affairs

26. Which sport is Neeraj Chopra associated with?

(a) Javelin Throw

(b) Weightlifting

(c) Wrestling

(d) Swimming

27. What is the old name of Prayagraj?

(a) Moradabad

(b) Allahabad

(c) Faizabad

(d) Asifganj

28. What is the Swachh Bharat Abhiyan all about?

- (a) Providing jobs to all
- (b) Providing education to all
- (c) Providing free medical treatment to all
- (d) Keeping our surroundings clean

29. Which is the tallest mammal on Earth?

- (a) Giraffe
- (b) Elephant
- (c) Zebra
- (d) Horse

Life Skills

30. What does the given sign mean?

- (a) Signal ahead
- (b) Zebra crossing
- (c) School ahead
- (d) None of these



31. If Trisha is crying, it means she is feeling _____ .

- (a) happy
- (b) sad
- (c) excited
- (d) thrilled

32. Who is a visually inspired person?

- (a) One who cannot walk
- (b) One who cannot hear
- (c) One who cannot talk
- (d) One who cannot see

33. When we make a mistake, we should always say _____ .

- (a) Sorry
- (b) Please
- (c) Welcome
- (d) Thank You

34. Which is not a good habit?

- (a) Taking bath every day
- (b) Respecting our elders
- (c) Wearing dirty clothes
- (d) Brushing teeth twice a day

35. _____ is the exchange of information among people.

- (a) Fight
- (b) Silence
- (c) Problem
- (d) Communication